

Felmérés ötös számkörben

1. Számírás:

--	--	--	--	--	--	--	--	--	--	--

Karikázd be a párosakat!

2p

2. Rendezd számokat!

	4	1	5	0	2					
<										

3. Írj a számok közé relációs jelet, és írd alá a különbséget!

1p

3	2	0	1	3	3	5	4

4. Írd a számok mellé a számszomszédokat!

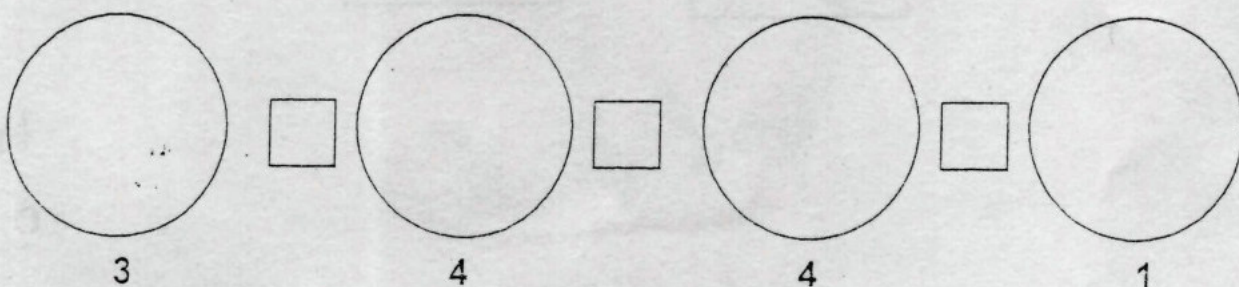
7p

<	3	<	
<	5	<	*
<	2	<	

*	<	0	<
	<	4	<
	<	1	<





5p

5. Rajzolj a halmazba, majd hasonlítsd össze őket!


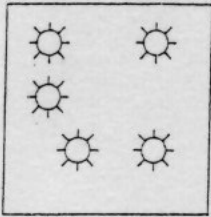




7p


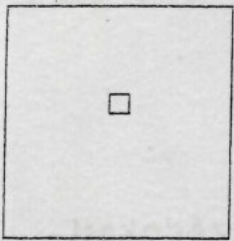


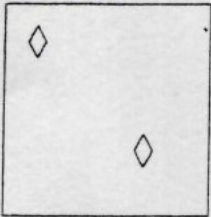



6. Miből mennyi van? Írd alá a számot, majd tedd közé a jelet!

	<input type="checkbox"/>		<input type="checkbox"/>		<input type="checkbox"/>		<input type="checkbox"/>	7 p
<input type="checkbox"/>		<input type="checkbox"/>		<input type="checkbox"/>		<input type="checkbox"/>		

7. Húzz át annyit, hogy igaz legyen!

				
1	4	2	0	4 p

8. Kösd az ábrákat a számegyenes megfelelő pontjához!

7 p

Ö.: 40 p